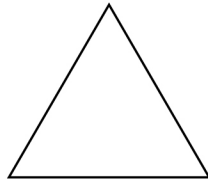




Name: _____

Count the number of shapes you find in the ghost house.



2

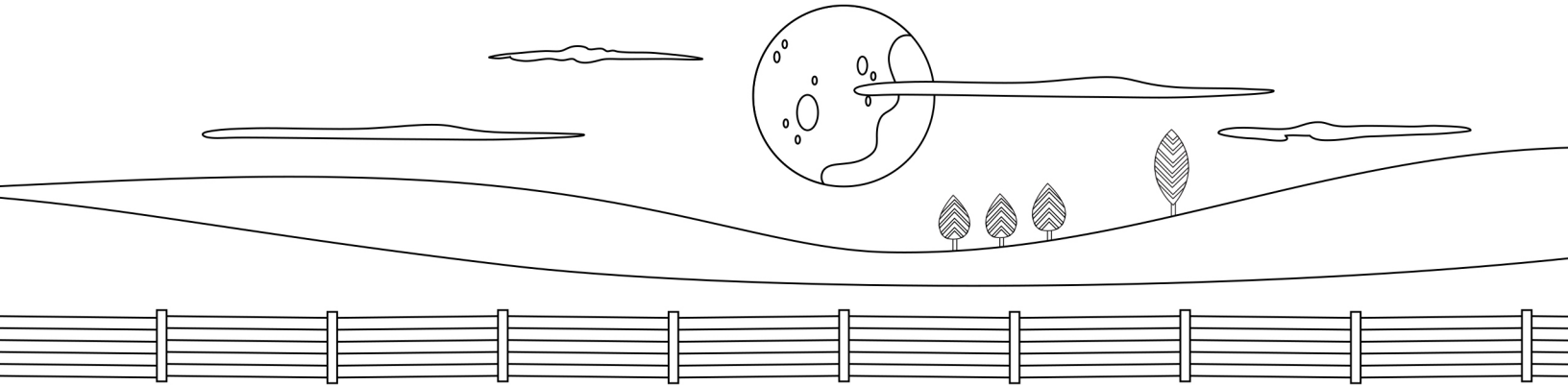


Watch and sing along to "Ghost Family" on [YouTube](https://www.youtube.com/watch?v=...).
Visit our website for more free resources at www.mothergooseclub.com

Name: _____

Let's help the ghost family count their pumpkins.

Solve these four addition problems. Write your answers in the dotted boxes.



$$\begin{array}{c} \text{ghost on pumpkin} \\ + \\ \text{pumpkin} \\ = \end{array} \boxed{2}$$

$$\begin{array}{c} \text{ghost on pumpkin} \\ + \\ \text{pumpkin pumpkin} \\ = \end{array} \boxed{}$$

$$\begin{array}{c} \text{ghost on pumpkin} \\ + \\ \text{pumpkin pumpkin pumpkin} \\ = \end{array} \boxed{}$$

$$\begin{array}{c} \text{ghost on pumpkin} \\ + \\ \text{pumpkin pumpkin pumpkin pumpkin} \\ = \end{array} \boxed{}$$

Watch and sing along to "Ghost Family" on [YouTube](https://www.youtube.com/watch?v=...).

Visit our website for more free resources at www.mothergooseclub.com