

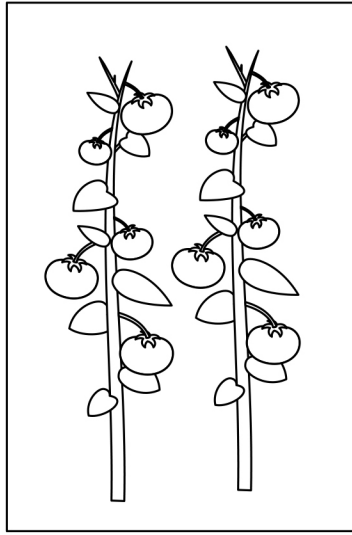



Name: _____

Count the number of fruits and vegetables in each box.
Then draw a line to connect to the right number.



8

6


3

10

Name: _____

Let's help Baa Baa and Teddy count fruit.

Solve the four math problems. Write your answers in the dotted boxes.



$$\text{Orange} + \text{Orange} + \text{Orange} + \text{Orange} + \text{Orange} + \text{Orange} = \boxed{6}$$

$$\text{Strawberry} + \text{Strawberry} + \text{Strawberry} + \text{Strawberry} + \text{Strawberry} + \text{Strawberry} + \text{Strawberry} + \text{Strawberry} = \boxed{}$$

$$\text{Grape} + \text{Grape} + \text{Grape} + \text{Grape} + \text{Grape} + \text{Grape} - \text{Grape} - \text{Grape} = \boxed{}$$

$$\text{Banana} + \text{Banana} + \text{Banana} + \text{Banana} + \text{Banana} + \text{Banana} + \text{Banana} + \text{Banana} + \text{Banana} + \text{Banana} - \text{Banana} = \boxed{}$$