

Name: \_\_\_\_\_

Let's help Eep count monkeys.


Solve these four addition problems. Write your answers in the dotted boxes.



1


3

2




=

3



=



=



=


Watch and sing along to "Five Little Monkeys" on [YouTube](https://www.youtube.com/watch?v=5Lm1k1k1k1).

Visit our website for more free resources at [www.mothersgooseclub.com](http://www.mothersgooseclub.com)

Name: \_\_\_\_\_

Let's help Mary and Jack count bananas.

Solve these four subtraction problems. Write your answers in the dotted boxes.



$$\begin{array}{cccccccc} \text{Banana} & \text{Banana} & \text{Banana} & \text{Banana} & \text{Banana} & \text{Banana} & \text{Banana} & \text{Banana} \end{array} - \begin{array}{ccc} \text{Banana} & \text{Banana} & \text{Banana} \end{array} = \boxed{5}$$

$$\begin{array}{cccccc} \text{Banana} & \text{Banana} & \text{Banana} & \text{Banana} & \text{Banana} & \text{Banana} \end{array} - \begin{array}{cc} \text{Banana} & \text{Banana} \end{array} = \boxed{\phantom{00}}$$

$$\begin{array}{ccccccc} \text{Banana} & \text{Banana} & \text{Banana} & \text{Banana} & \text{Banana} & \text{Banana} & \text{Banana} \end{array} - \begin{array}{ccc} \text{Banana} & \text{Banana} & \text{Banana} \end{array} = \boxed{\phantom{00}}$$

$$\begin{array}{ccccc} \text{Banana} & \text{Banana} & \text{Banana} & \text{Banana} & \text{Banana} \end{array} - \begin{array}{cc} \text{Banana} & \text{Banana} \end{array} = \boxed{\phantom{00}}$$