




Name: _____



Let's help Mary and Jack count bananas.

Solve these four subtraction problems. Write your answers in the dotted boxes.



 -  = 5

 -  =

 -  =

 -  =

Watch and sing along to "Five Little Monkeys" on [YouTube](https://www.youtube.com/watch?v=5L1m1m1m1).

Visit our website for more free resources at www.mothergooseclub.com